



Maths Monday – 20th April 2020 Print or copy out the questions and use the pictures of the cubes to help you answer.



I'm trying to work out which numbers are represented in the grids. Please help me by filling in the boxes.



1.

tens	ones
	

There is ten and ones.

ten + ones =



2.

tens	ones
	

There are tens and ones.

tens + ones =


3.

tens	ones
	

There are tens and one.

tens + one =

4.

tens	ones
	

There are tens and ones.

tens + ones =