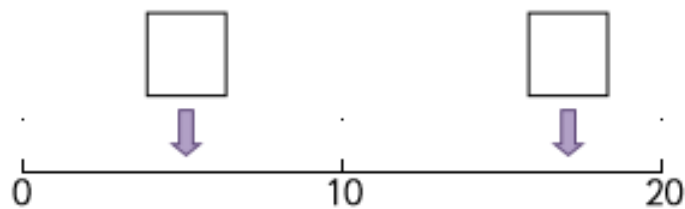
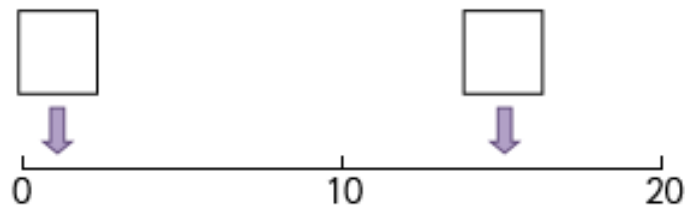
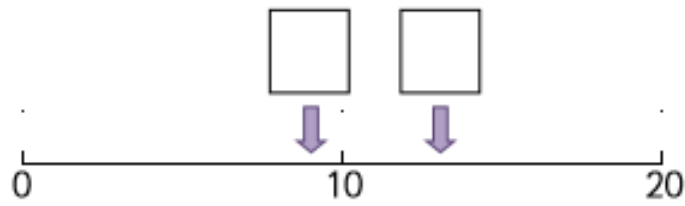
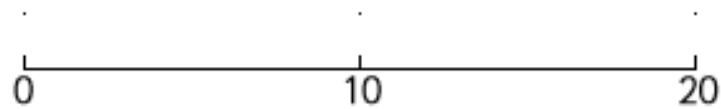


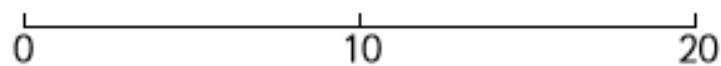
Maths Monday – 20th April 2020 Copy out the number lines then estimate and fill in the missing numbers. Use the numbers you can see to help you.



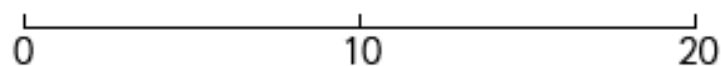
Draw an arrow showing where 7 would be.



Draw an arrow showing where 19 would be.



Draw an arrow showing where 5 would be.



Draw an arrow showing where 13 would be.

