
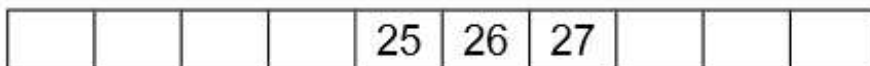



Maths Monday – 20<sup>th</sup> April 2020 Print or copy out the number tracks and then fill in the missing numbers.

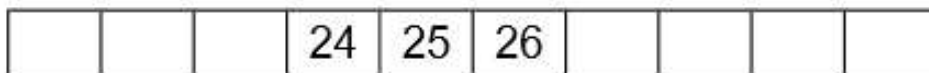
Here is part of a number track. Can you find where 13 and 20 go?



Here is part of a number track. Can you find where 23 and 29 go?



Here is part of a number track. Can you find where 21 and 27 go?



Here is part of a number track. Can you find where 11 and 19 go?

